

Name : _____

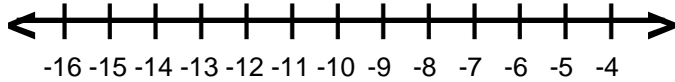
Score : _____

Teacher : _____

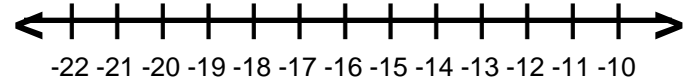
Date : _____

Solve and Graph the Inequalities

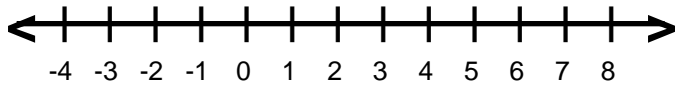
1) $-15 > -9 + j$



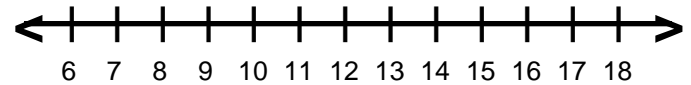
6) $n - 4 < -16$



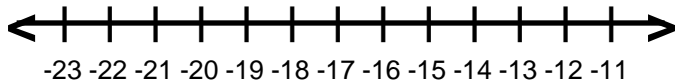
2) $12 < c + 9$



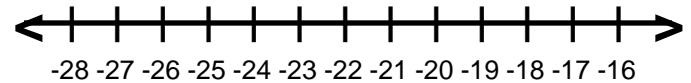
7) $5 \geq -4 + a$



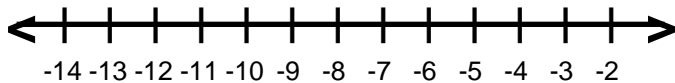
3) $z + 8 \leq -11$



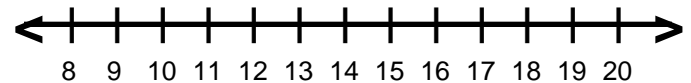
8) $-12 \leq 6 + g$



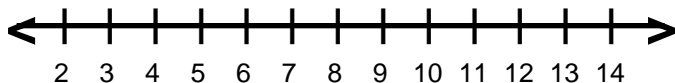
4) $-14 \geq -4 + r$



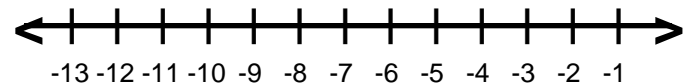
9) $8 > p - 5$



5) $10 \geq x - 2$



10) $-19 \leq y - 8$



Name : _____

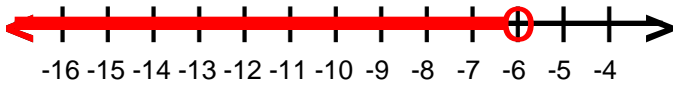
Score : _____

Teacher : _____

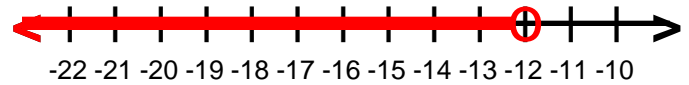
Date : _____

Solve and Graph the Inequalities

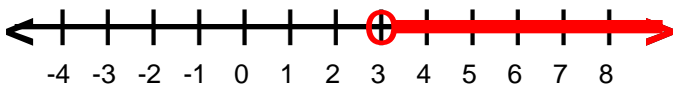
1) $j < -6$



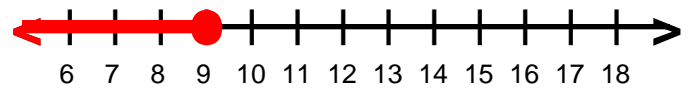
6) $n < -12$



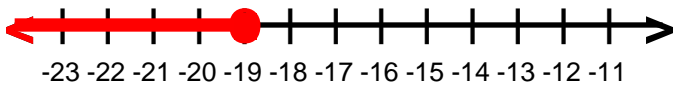
2) $c > 3$



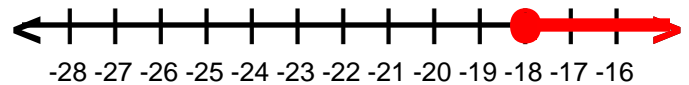
7) $a \leq 9$



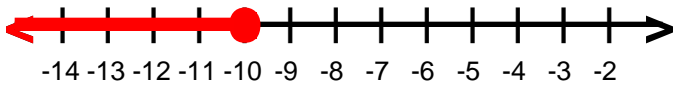
3) $z \leq -19$



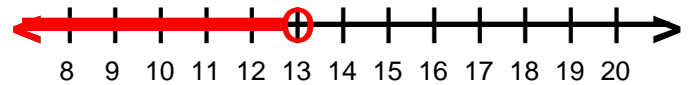
8) $g \geq -18$



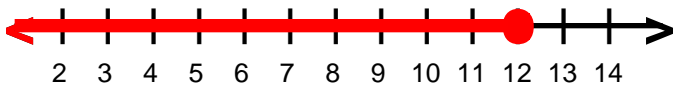
4) $r \leq -10$



9) $p < 13$



5) $x \leq 12$



10) $y \geq -11$

